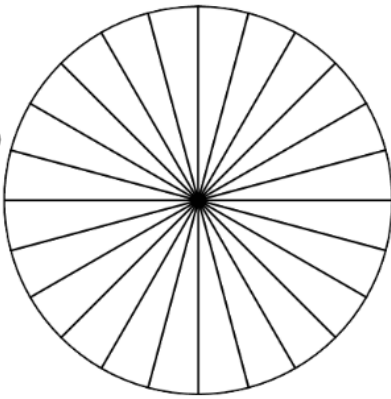


Shade each pie chart to show the average number of hours per day of daylight, twilight and darkness in each month. Then write a sentence for each month, describing what each place would be like at 1pm.

**Daylight, Twilight and Darkness Hours in Antarctica**

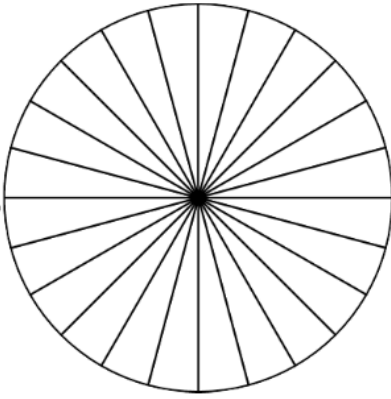
	January	April	July	October
Daylight	21	3	0	20
Twilight	3	13	4	4
Darkness	0	8	20	0

January



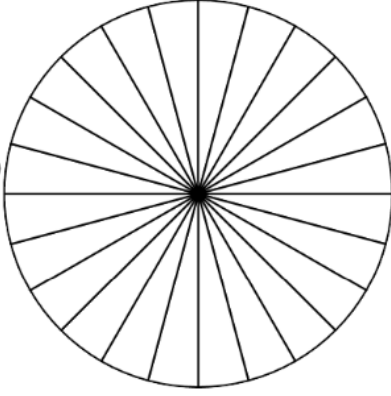
At 1pm in the UK, it would be...

April



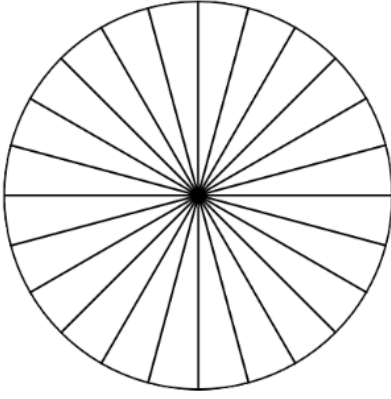
At 1pm in the UK, it would be...

July



At 1pm in the UK, it would be...

October



At 1pm in the UK, it would be...

At 1pm in Antarctica, it would be...

At 1pm in Antarctica, it would be...

At 1pm in Antarctica, it would be...

At 1pm in Antarctica, it would be...